



Les fractions équivalentes.

1 Cherche des fractions égales à $\frac{1}{2}$.

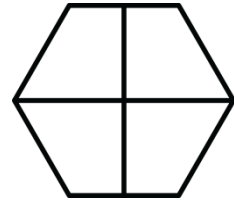
Colorie la moitié de ces figures, puis écris la fraction que tu as coloriée.




$\frac{\cdot}{\cdot}$




$\frac{\cdot}{\cdot}$



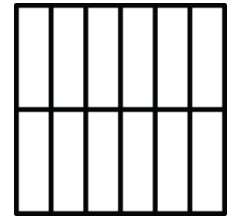
$\frac{\cdot}{\cdot}$



$\frac{\cdot}{\cdot}$



$\frac{\cdot}{\cdot}$



$\frac{\cdot}{\cdot}$

• Ecris les égalités que tu as trouvées :


$\frac{1}{2} = \frac{\cdot}{\cdot} = \frac{\cdot}{\cdot} = \frac{\cdot}{\cdot} = \frac{\cdot}{\cdot} = \frac{\cdot}{\cdot} = \frac{\cdot}{\cdot} = \frac{\cdot}{\cdot}$

• Cherche d'autres fractions égales à $\frac{1}{2}$: _____, _____, _____, _____.


2 Ces quantités coloriées montrent des fractions équivalentes, à toi de les retrouver!



$\frac{\cdot}{\cdot}$


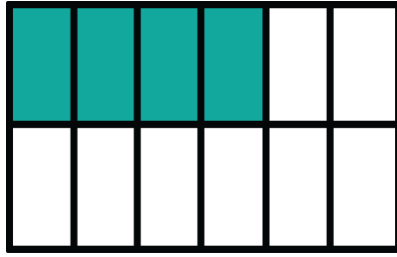



$\frac{\cdot}{\cdot} = \frac{\cdot}{\cdot}$



$\frac{\cdot}{\cdot}$

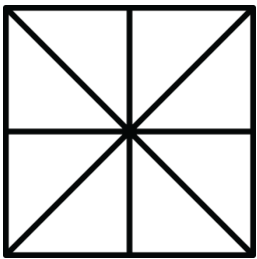
③ Même exercice :



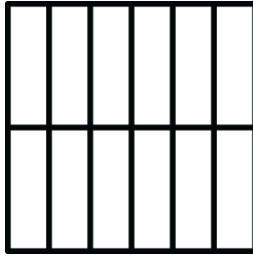
- Ecris les égalités que tu as trouvées :

$$\frac{\cdot}{\cdot} = \frac{\cdot}{\cdot} = \frac{\cdot}{\cdot}$$


④ Colorie les fractions demandées dans les figures suivantes.



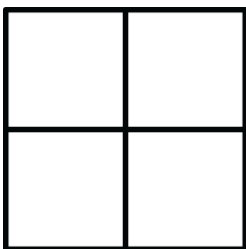
$\frac{2}{8}$




$\frac{4}{12}$



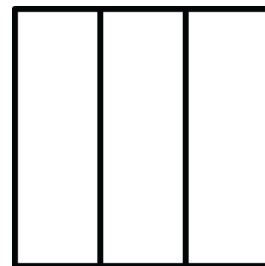
$\frac{2}{6}$



$\frac{1}{4}$



$\frac{3}{12}$



$\frac{1}{3}$

- Retrouve les fractions équivalentes et note-les ci-dessous :

.....

.....