


Nom : .....

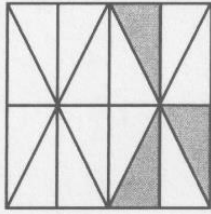
Prénom : .....

Date : .....

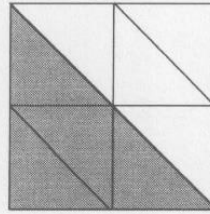
Ecris la fraction qui correspond à la partie grisée.




a.  $\frac{\dots}{\dots}$



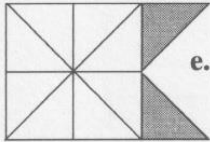
b.  $\frac{\dots}{\dots}$



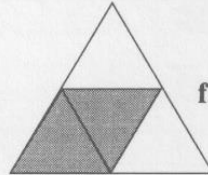
c.  $\frac{\dots}{\dots}$




d.  $\frac{\dots}{\dots}$



e.  $\frac{\dots}{\dots}$

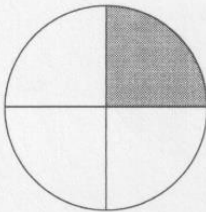


f.  $\frac{\dots}{\dots}$

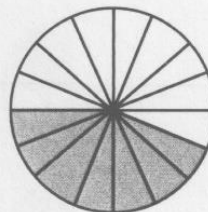


g.  $\frac{\dots}{\dots}$

h.  $\frac{\dots}{\dots}$




i.  $\frac{\dots}{\dots}$



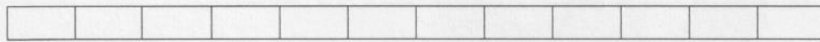
19.1.

.....  
9

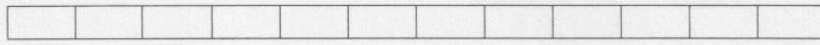
Colorie la partie qui correspond à la fraction donnée.



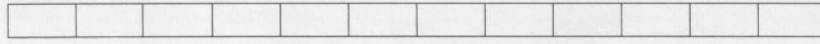
$\frac{1}{2}$



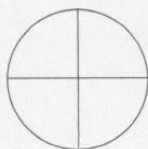
$\frac{1}{3}$



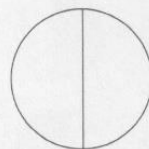
$\frac{1}{6}$



$\frac{7}{12}$



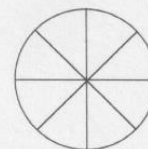
$\frac{1}{4}$



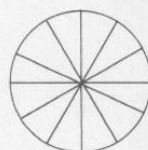
$\frac{1}{2}$




$\frac{2}{3}$



$\frac{3}{8}$



$\frac{7}{12}$



$\frac{4}{9}$

19.2.

.....  
10